

Time: 10 Minutes

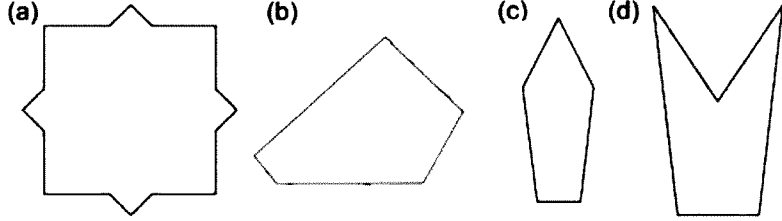
Paper Math 4

Total Marks: 10

6th Month, 3rd Week, 4th Day Syllabus: Unit 6: Ex. Review-Q No. 7, 8

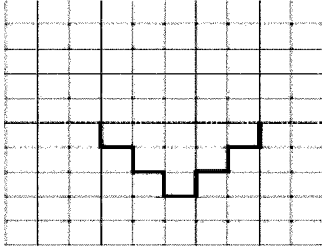
Q.No.1. Identify the symmetry in the given figures and draw the line of symmetry where possible: (5)

سوال نمبر 1: دی گئی اشکال میں سمٹری کو پہچانیں اور جہاں ممکن ہو سمٹری کی لائن لگائیں:



Q.No.2. Complete the given figure:

سوال نمبر 2: دی گئی شکل کو مکمل کریں:




---



---



---



---



---



---



---



---



---



---

Time: 10 Minutes

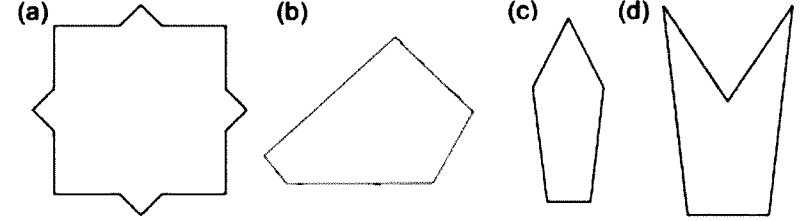
Paper Math 4

Total Marks: 10

6th Month, 3rd Week, 4th Day Syllabus: Unit 6: Ex. Review-Q No. 7, 8

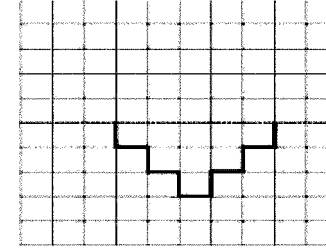
Q.No.1. Identify the symmetry in the given figures and draw the line of symmetry where possible: (5)

سوال نمبر 1: دی گئی اشکال میں سمٹری کو پہچانیں اور جہاں ممکن ہو سمٹری کی لائن لگائیں:



Q.No.2. Complete the given figure:

سوال نمبر 2: دی گئی شکل کو مکمل کریں:




---



---



---



---



---



---



---



---



---



---